

8-16-2006

Exploring the Area of Rectangles and their Applications

Brian Cheyne
The College at Brockport


Bonnie Bush
The College at Brockport

Dave Iacchetta
The College at Brockport

Pablo Lopez
The College at Brockport

Bruce Peachey
The College at Brockport

Follow this and additional works at: http://digitalcommons.brockport.edu/cmst_lessonplans

 Part of the [Physical Sciences and Mathematics Commons](#), and the [Science and Mathematics Education Commons](#)

Repository Citation

Cheyne, Brian; Bush, Bonnie; Iacchetta, Dave; Lopez, Pablo; and Peachey, Bruce, "Exploring the Area of Rectangles and their Applications" (2006). *Lesson Plans*. 213.

http://digitalcommons.brockport.edu/cmst_lessonplans/213

This Lesson Plan is brought to you for free and open access by the CMST Institute at Digital Commons @Brockport. It has been accepted for inclusion in Lesson Plans by an authorized administrator of Digital Commons @Brockport. For more information, please contact kmyers@brockport.edu.

Exploring the Area of Rectangles and their Applications

OBJECTIVES

- Students will be able to calculate the area of rectangles.
- Students will be able to apply their knowledge of area in a real-life situations.

Standard # 3

- Students will understand mathematics and become mathematically confident by communicating and reasoning mathematically, by applying mathematics in real-world settings, and by solving problems through the integrated study of number systems, geometry, algebra, data analysis, probability, and trigonometry.

Key Idea

- Students estimate and find measures such as length, perimeter, area, and volume using both nonstandard and standard units

Materials

- Computer Lab
- Image Tool from Project Interactivate
- A pre-designed house plan
- GSP
- TI-84
- Excel
- STELLA
- Worksheets

Activities

- We will explain how to find the area of rectangles using the TI 84 tutorial.
- We will use “Area Explorer” from Project Interactivate to demonstrate how to find the area of different rectangular shapes.
- A Pre-designed house plan from GSP will be given to the students (to be loaded in each computer) to simulate a floor renewal. Students will calculate different areas from the house floor plan and collect the data.


Activities Continued

- The class will be divided into four groups; Group 1 will work with GSP, Group 2 will work with STELLA, Group 3 will work with Excel and Group 4 will work with the TI 84.
- We will give them the price of the materials to be used and the cost of installation. The students will calculate the total cost of the project.
- To evaluate the students' understanding, we will provide a worksheet on which the students will calculate the area of the given figures.

Activity 1

- We will explain how to find the area of rectangles using the TI 84 tutorial.

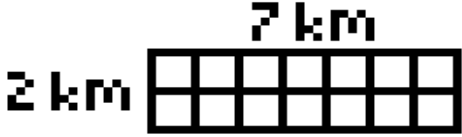
DEFINITION: RECTANGLE



A **RECTANGLE** IS
A QUADRILATERAL WITH
4 RIGHT ANGLES.

MENU | **AREA** | **EXAMPLE**

EXAMPLE: RECTANGLE



7 km
2 km

AREA = 7 km * 2 km
= 14 sq km

MENU | **DEF** | **AREA** | **EXAMPLE**

Activity 2

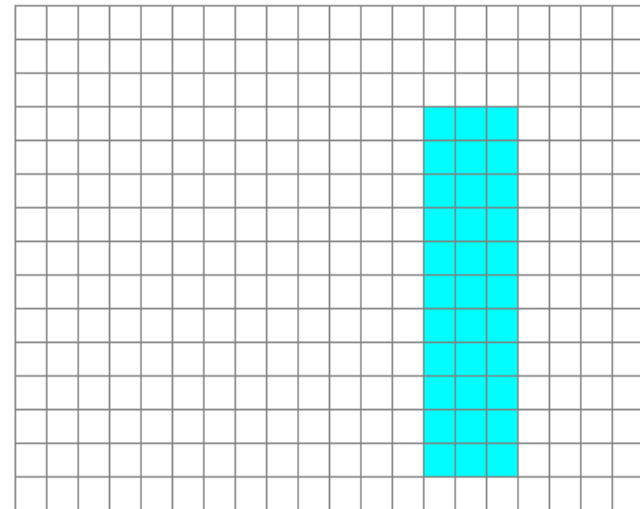
- We will use “Area Explorer” from Project Interactivate to demonstrate how to find the area of different rectangular shapes.

Area Explorer

what?

how?

why?



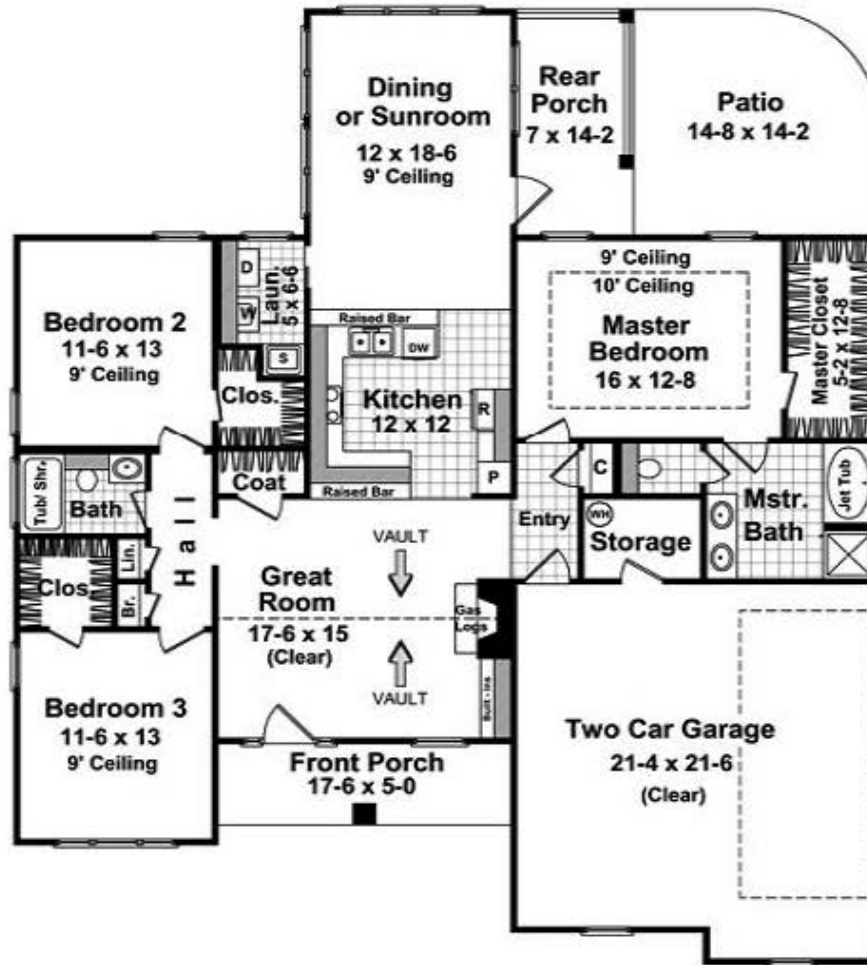
What is the shape's area? square units [Check Answer](#)

[Compare Areas & Perimeters](#) [Keep Score](#)

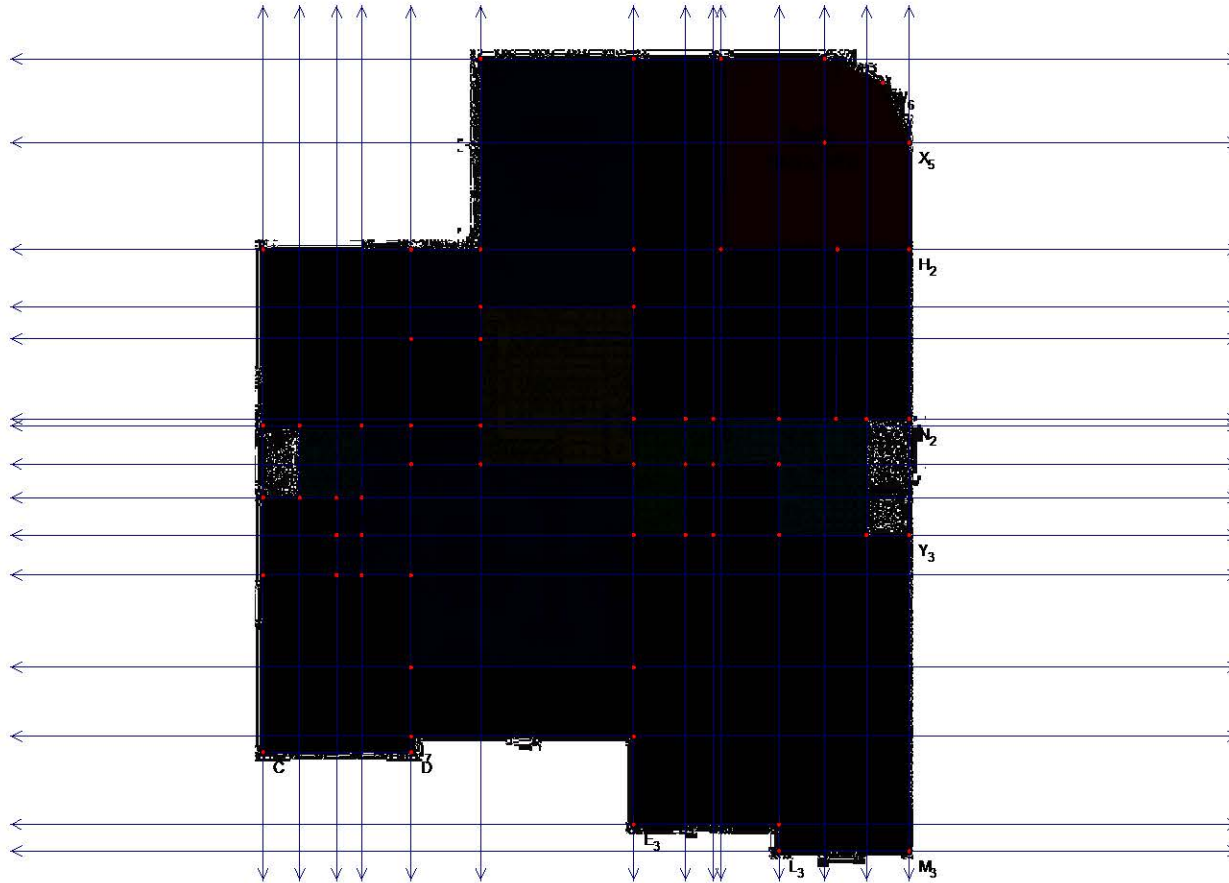
Activity 3

- A Pre-designed house plan from GSP will be given to the students (to be loaded in each computer) to simulate a floor renewal. Students will calculate different areas from the house floor plan and collect the data.

House Plan



GSP House Plan



Activity 4

- Divide the class into four groups:
- Group 1: GSP
- Group 2: Stella
- Group 3: Excel
- Group 4: TI 84

Activity 5

- We will give them the price of the materials to be used and the cost of installation. The students will calculate the total cost of the project.

	Carpet	10.26
	Hardwood	6.26
	Bath Tiles	7.43
	Kitchen Tiles	7.66
	Laundry Tiles	9.99
	Patio Paint	1.3
	Entry Tiles	10.47
	Porch Paint	1.3
	Garage Paint	0.8


Activity 6

- To evaluate the students' understanding, we will provide a worksheet on which the students will calculate the area of the given figures.

Area and Perimeter
(Answer ID #000031)

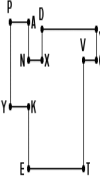
Find the area and perimeter of each polygon.

1.



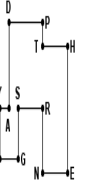
$\overline{EG}=28$ mi	$\overline{GM}=73$ mi	$\overline{CU}=29$ mi	$\overline{YU}=21$ mi
$\overline{KR}=58$ mi	$\overline{LR}=65$ mi	$\overline{EH}=45$ mi	$\overline{UE}=32$ mi
$\overline{BM}=28$ mi	$\overline{LC}=60$ mi	$\overline{FH}=24$ mi	$\overline{FE}=21$ mi

2.



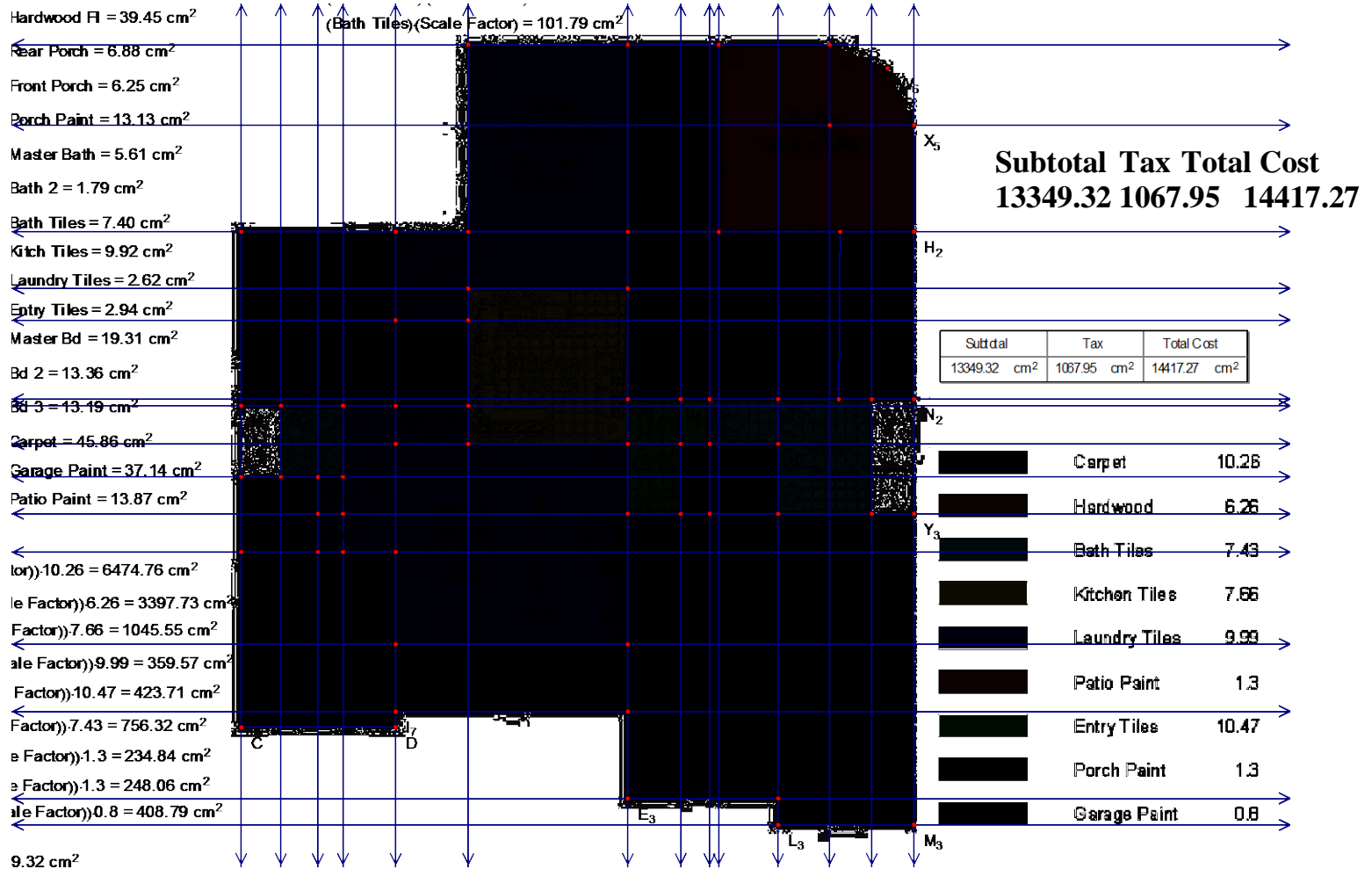
$\overline{DX}=22$ m	$\overline{VC}=21$ m	$\overline{VT}=77$ m	$\overline{PA}=30$ m
$\overline{DJ}=89$ m	$\overline{KE}=44$ m	$\overline{ET}=90$ m	$\overline{AN}=27$ m
$\overline{JC}=22$ m	$\overline{NX}=22$ m	$\overline{PY}=60$ m	$\overline{YK}=30$ m

3.

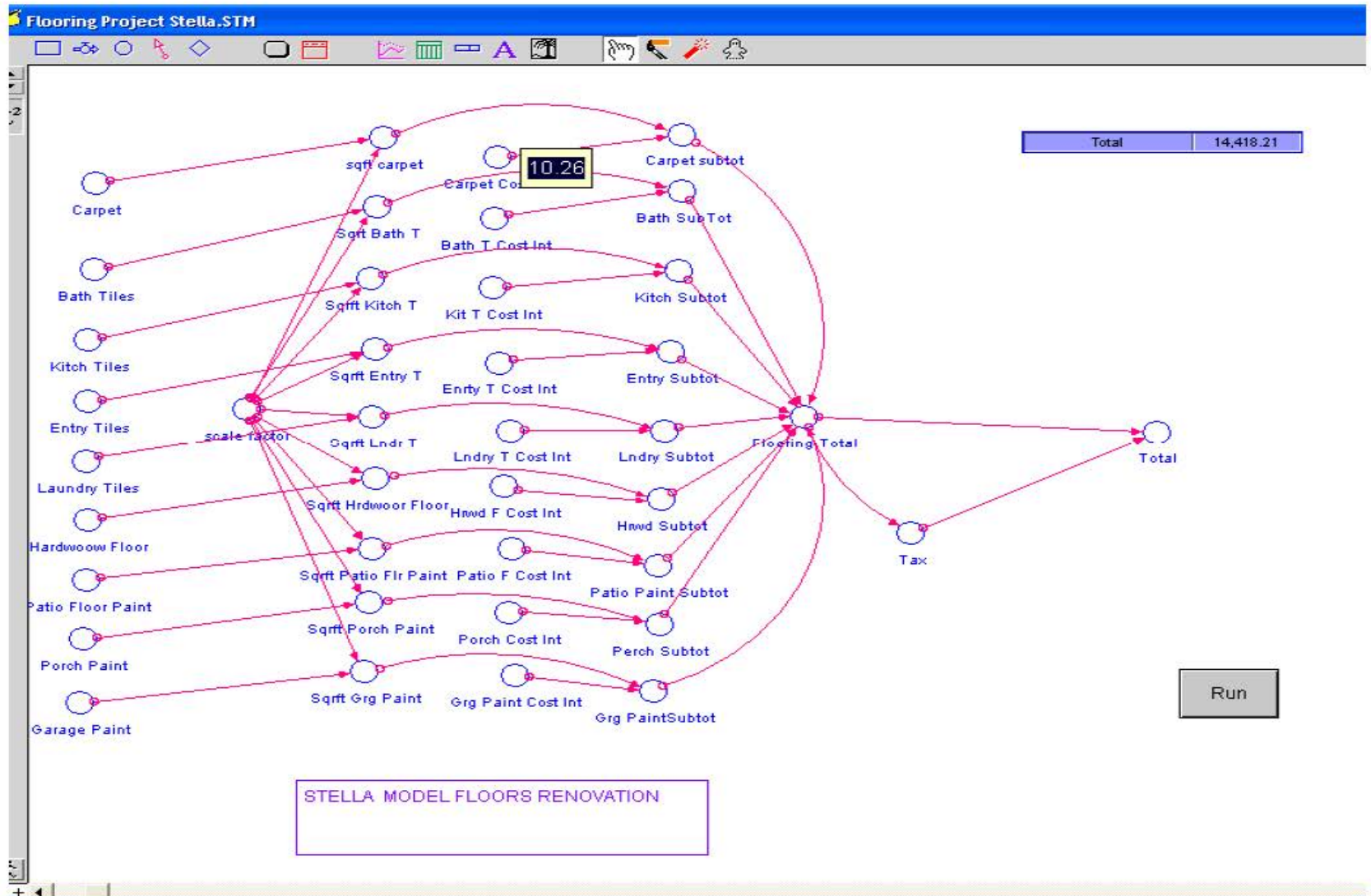


$\overline{YM}=36$ km	$\overline{MG}=30$ km	$\overline{PT}=17$ km	$\overline{TH}=41$ km
$\overline{YA}=15$ km	$\overline{DA}=61$ km	$\overline{SR}=40$ km	$\overline{HE}=90$ km
$\overline{SG}=36$ km	$\overline{DP}=55$ km	$\overline{RN}=46$ km	$\overline{NE}=41$ km

GSP Final Product



STELLA Final Product



Excel Final Product

Floor Renovation Project							
Kind of Floor	Sq. cm	Scale Factor	Sq. Ft	Cost/Inst	Subtotal	Tax	Total
Carpet	45.86	13.76	631.0336	10.26	6474.405	0.08	6992.357
Bath Tiles	7.4	13.76	101.824	7.43	756.5523	0.08	817.0765
Kitchen Tiles	9.92	13.76	136.4992	7.66	1045.584	0.08	1129.231
Laundry Tiles	2.62	13.76	36.0512	9.99	360.1515	0.08	388.9636
Entry Tiles	2.94	13.76	40.4544	10.47	423.5576	0.08	457.4422
Hardwood Floor	39.45	13.76	542.832	6.26	3398.128	0.08	3669.979
Porch Paint	13.13	13.76	180.6688	1.3	234.8694	0.08	253.659
Patio Paint	13.87	13.76	190.8512	1.3	248.1066	0.08	267.9551
Garage Paint	37.14	13.76	511.0464	0.8	408.8371	0.08	441.5441
						Total Cost	14418.21

TI 84 Final Product

L1	L2	L3	1
9.92	13.76	136.50	
2.62	13.76	36.05	
2.94	13.76	40.45	
13.13	13.76	180.67	
37.14	13.76	511.05	
13.87	13.76	190.85	
-----	-----	-----	

L1(10) =

L4	L5	L6	6
7.66	1129.2	12609	
9.99	388.96	12998	
10.47	457.44	13455	
1.30	253.66	13709	
.80	441.54	14150	
1.30	267.96	14418	
-----	-----	-----	

L6(9) = 14418.2067...

Rubrics

	Beginning 1	Developing 2	Accomplished 3	Exemplary 4	Score
Skills: Area, scale, unit cost, total cost.	Incomplete work. Demonstrates little understanding of topic.	Demonstrates <u>an elementary understanding skills.</u>	Demonstrates an adequate understanding of skills some wrong answers but not many	A complete understanding of skills no mistakes	
Computer Use: GSP, STELLA, Excel, TI 84	Incomplete	Shows little understanding of GSP, STELLA, Excel and TI 84	Demonstrates an adequate understanding of GSP, STELLA, Excel, TI 84.	Demonstrates a exemplary understanding of <u>GSP, STELLA, Excel, TI 84.</u>	
Quality of Research	Incomplete	Shows minimal understanding of researching costs. Poor decision making.	Shows adequate research and understanding of cost of materials. Adequate decision making.		
				TOTAL	

Presenters

- Brian Cheyne
- Bonnie Bush
- David Iachetta
- Pablo Lopez
- Bruce Peachey